

No part of this product may be reproduced in any form or by any electronic or mechanical means, including information storage and retrieval systems, without written permission from the IB.

Additionally, the license tied with this product prohibits commercial use of any selected files or extracts from this product. Use by third parties, including but not limited to publishers, private teachers, tutoring or study services, preparatory schools, vendors operating curriculum mapping services or teacher resource digital platforms and app developers, is not permitted and is subject to the IB's prior written consent via a license. More information on how to request a license can be obtained from <http://www.ibo.org/contact-the-ib/media-inquiries/for-publishers/guidance-for-third-party-publishers-and-providers/how-to-apply-for-a-license>.

Aucune partie de ce produit ne peut être reproduite sous quelque forme ni par quelque moyen que ce soit, électronique ou mécanique, y compris des systèmes de stockage et de récupération d'informations, sans l'autorisation écrite de l'IB.

De plus, la licence associée à ce produit interdit toute utilisation commerciale de tout fichier ou extrait sélectionné dans ce produit. L'utilisation par des tiers, y compris, sans toutefois s'y limiter, des éditeurs, des professeurs particuliers, des services de tutorat ou d'aide aux études, des établissements de préparation à l'enseignement supérieur, des fournisseurs de services de planification des programmes d'études, des gestionnaires de plateformes pédagogiques en ligne, et des développeurs d'applications, n'est pas autorisée et est soumise au consentement écrit préalable de l'IB par l'intermédiaire d'une licence. Pour plus d'informations sur la procédure à suivre pour demander une licence, rendez-vous à l'adresse <http://www.ibo.org/fr/contact-the-ib/media-inquiries/for-publishers/guidance-for-third-party-publishers-and-providers/how-to-apply-for-a-license>.

No se podrá reproducir ninguna parte de este producto de ninguna forma ni por ningún medio electrónico o mecánico, incluidos los sistemas de almacenamiento y recuperación de información, sin que medie la autorización escrita del IB.

Además, la licencia vinculada a este producto prohíbe el uso con fines comerciales de todo archivo o fragmento seleccionado de este producto. El uso por parte de terceros —lo que incluye, a título enunciativo, editoriales, profesores particulares, servicios de apoyo académico o ayuda para el estudio, colegios preparatorios, desarrolladores de aplicaciones y entidades que presten servicios de planificación curricular u ofrezcan recursos para docentes mediante plataformas digitales— no está permitido y estará sujeto al otorgamiento previo de una licencia escrita por parte del IB. En este enlace encontrará más información sobre cómo solicitar una licencia: <http://www.ibo.org/es/contact-the-ib/media-inquiries/for-publishers/guidance-for-third-party-publishers-and-providers/how-to-apply-for-a-license>.

Sports, exercise and health science
Standard level
Paper 1

Friday 17 May 2019 (afternoon)

45 minutes

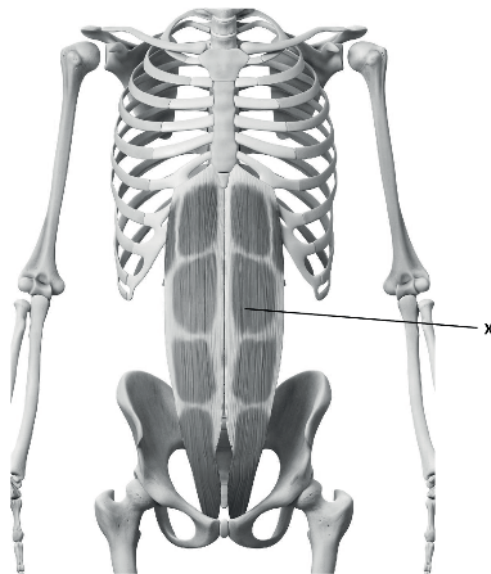
Instructions to candidates

- Do not open this examination paper until instructed to do so.
- Answer all the questions.
- For each question, choose the answer you consider to be the best and indicate your choice on the answer sheet provided.
- The maximum mark for this examination paper is **[30 marks]**.

1. Which are the four types of bones?
 - A. Short, periosteum, long, regular
 - B. Long, short, irregular, flat
 - C. Compact, irregular, flat, long
 - D. Flat, short, compact, regular

2. An athlete's broken leg is immobilized in a cast. Which muscle characteristic causes difficulty in walking after the prolonged inactivity?
 - A. Extensibility
 - B. Elasticity
 - C. Atrophy
 - D. Hypertrophy

3. What is the muscle labelled X in the diagram?



[Source: ID 45575799 © Sebastian Kaulitzki | Dreamstime.com]

- A. Abdominus rectus
- B. External obliques
- C. Erector spinae
- D. Iliopsoas

- 4. What is vital capacity?
 - A. Inspiratory reserve volume plus total lung capacity
 - B. Total lung capacity minus residual volume
 - C. Tidal volume plus inspiratory reserve volume
 - D. Residual volume minus expiratory reserve volume

- 5. Which component of blood is greatest by volume?
 - A. Electrolytes
 - B. Plasma
 - C. Erythrocytes
 - D. Leucocytes

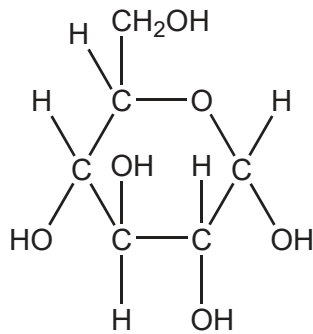
- 6. How does an increased erythrocyte level benefit an athlete?
 - A. By increasing the oxygen carrying capacity of the blood
 - B. By decreasing the capacity of the blood to clot in case of an injury
 - C. By increasing the ability of the body to fight infection
 - D. By decreasing viscosity of the blood

- 7. What type of blood is pumped by each of the blood vessels listed?

	Vena cava	Pulmonary artery	Pulmonary vein	Aorta
A.	oxygenated	deoxygenated	deoxygenated	oxygenated
B.	deoxygenated	oxygenated	deoxygenated	deoxygenated
C.	deoxygenated	deoxygenated	oxygenated	oxygenated
D.	oxygenated	deoxygenated	oxygenated	deoxygenated

Turn over

8. How does the heart meet the demand for oxygenated blood during physical activity?
- A. Increasing cardiac output, decreasing stroke volume, increasing heart rate
 - B. Decreasing cardiac output, decreasing stroke volume, decreasing heart rate
 - C. Increasing cardiac output, increasing stroke volume, increasing heart rate
 - D. Decreasing cardiac output, increasing stroke volume, increasing heart rate
9. What does diastolic blood pressure measure?
- A. The force exerted by blood on arterial walls during ventricular contraction
 - B. The force exerted by blood on venous walls during ventricular relaxation
 - C. The force exerted by blood on arterial walls during ventricular relaxation
 - D. The force exerted by blood on venous walls during ventricular contraction
10. Which molecule is represented by the diagram below?



- A. Glucose
- B. Fat
- C. Amino acid
- D. Protein

11. What is the chemical composition of a protein molecule?
- A. Glycerol and three fatty acids
 - B. Only carbon, hydrogen and oxygen
 - C. Only carbon and oxygen
 - D. Carbon, hydrogen, oxygen and nitrogen
12. What is the correct order (greatest to least) for the amount of energy contained in 100 g of each body fuel?
- A. Carbohydrate, protein, lipid
 - B. Lipid, carbohydrate, protein
 - C. Protein, carbohydrate, lipid
 - D. Lipid, protein, carbohydrate
13. What type of process is lipolysis?
- A. Aerobic anabolism
 - B. Anaerobic anabolism
 - C. Aerobic catabolism
 - D. Anaerobic catabolism
14. Which energy system is the most rapid to resynthesize ATP?
- A. Anaerobic glycolysis
 - B. Aerobic glycolysis
 - C. Lactic acid
 - D. Creatine phosphate

Turn over


15. A skier, when snowplowing, turns the soles of their feet outwards. What action are the feet performing?



[Source: adapted from www.mechanicsofsport.com]

- A. Extension
- B. Circumduction
- C. Inversion
- D. Eversion

16. Which type of contraction occurs in the rectus femoris while performing a squat (moving from position A to B)?




[Source: adapted from “parallel squat” by Everkinetic, <https://commons.wikimedia.org/wiki/File:Squats.svg>. Licensed under a Creative Commons Attribution-ShareAlike 3.0 Unported license. <https://creativecommons.org/licenses/by-sa/3.0/>.]

- A. Isometric
 - B. Isotonic eccentric
 - C. Isotonic concentric
 - D. Isokinetic eccentric
17. Which is an example of a second-class lever?
- A. The ankle joint during plantar flexion
 - B. The elbow during flexion
 - C. The knee during extension
 - D. The hip during abduction

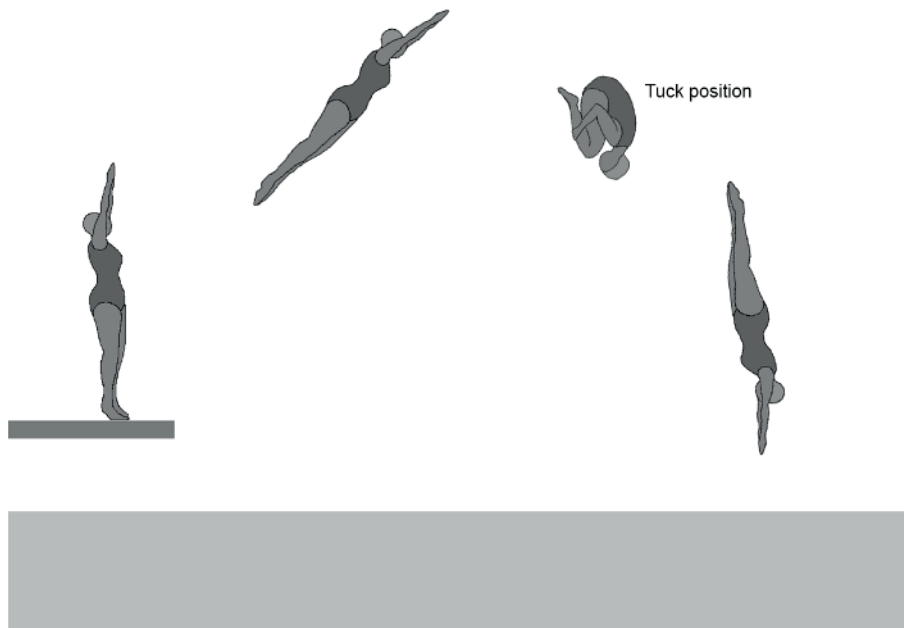
Turn over

18. Which of Newton's laws predicts the increase in acceleration of the swing when a child uses a lighter baseball bat?



- A. First
- B. Second
- C. Third
- D. First and second

19. Why does a diver use the tuck position?



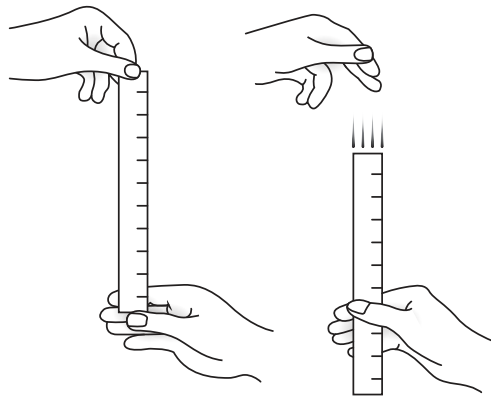
[Source: used with permission]

- A. To reduce spin by decreasing moment of inertia
 - B. To reduce spin by increasing moment of inertia
 - C. To increase spin by decreasing moment of inertia
 - D. To increase spin by increasing moment of inertia
20. What is the sequence of a motor unit signal travelling from the brain to the muscle?
- A. Synapse, axon, cell body, dendrite, motor end plate
 - B. Synapse, dendrite, cell body, axon, motor end plate
 - C. Motor end plate, dendrite, cell body, axon, synapse
 - D. Synapse, dendrite, axon, cell body, motor end plate

Turn over

21. Which motor skill classifications apply when an athlete runs a 100 m race?
- A. Gross, interactive, externally paced
 - B. Fine, individual, internally paced
 - C. Gross, coactive, externally paced
 - D. Fine, coactive, internally paced


22. What is measured by the drop test?



[Source: © Thapos, thapos.com]

- A. Reaction time
 - B. Response time
 - C. Movement time
 - D. Coordination
23. As a golfer hits the ball they feel a sharp pain in the right bicep; this is an example of which types of feedback?
- A. Knowledge of result, negative, terminal
 - B. Knowledge of result, positive, concurrent
 - C. Knowledge of performance, negative, concurrent
 - D. Knowledge of performance, positive, terminal

24. A teacher introduced fencing to a group of judo athletes. Actions in judo are initiated by the foot whereas fencing actions are initiated by the hand. The judo athletes were slow to master the fencing skills. What learning transfer took place?
- A. Positive
 - B. Negative
 - C. Bilateral
 - D. Stage to stage
25. A coach is teaching a large group of students in a potentially dangerous situation, for example shot put training. What is the safest teaching style to use?



[Source: adapted from www.wikihow.com]

- A. Command
- B. Reciprocal
- C. Problem-solving
- D. Mental

Turn over

26. What can be represented by error bars on graphs?
- A. Reliability of data
 - B. One standard deviation of data
 - C. Percent change of data
 - D. Validity of data
27. What is coefficient of variation?
- A. The ratio of the standard deviation to the mean expressed as a percentage
 - B. The sum of the standard deviation and the mean
 - C. The ratio of the mean to the standard deviation expressed as a percentage
 - D. The sum of the standard deviation subtracted from the mean
28. Which terms apply to the use of the multistage fitness test to evaluate the muscular power of a 100 m swimmer?
- A. Reliable and valid
 - B. Not reliable and not valid
 - C. Not reliable but valid
 - D. Reliable and not valid
29. Which fitness component is most important when a soccer player dribbles a ball around opponents while maintaining their balance?
- A. Muscular endurance
 - B. Aerobic capacity
 - C. Flexibility
 - D. Agility

30. Why would an athlete work at different heart rate training zones rather than a maximum heart rate zone?
- A. To avoid overreaching
 - B. To increase the number of fast-twitch fibres
 - C. To target specific training adaptations
 - D. To reduce excess post-exercise oxygen consumption (EPOC)
-